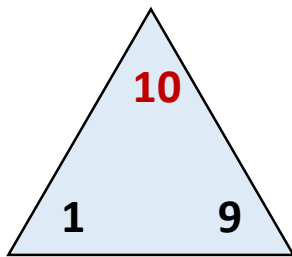


Тренажер «Связь слагаемых и суммы»

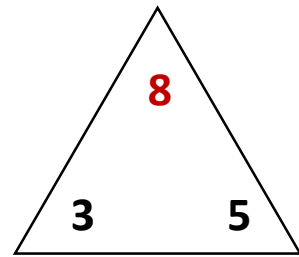
Заполни числа в выражениях , опираясь на образец.



$$\boxed{1} + \boxed{9} = \boxed{10}$$

$$\boxed{10} - \boxed{1} = \boxed{9}$$

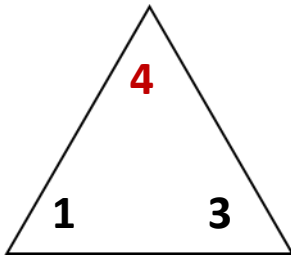
$$\boxed{10} - \boxed{9} = \boxed{1}$$



$$\boxed{} + \boxed{} = \boxed{8}$$

$$\boxed{8} - \boxed{} = \boxed{}$$

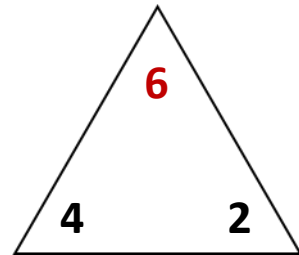
$$\boxed{8} - \boxed{} = \boxed{}$$



$$\boxed{} + \boxed{} = \boxed{4}$$

$$\boxed{4} - \boxed{} = \boxed{}$$

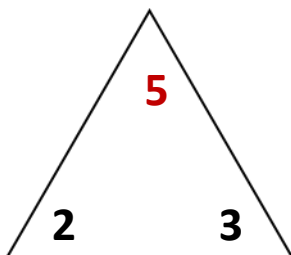
$$\boxed{4} - \boxed{} = \boxed{}$$



$$\boxed{} + \boxed{} = \boxed{}$$

$$\boxed{} - \boxed{} = \boxed{}$$

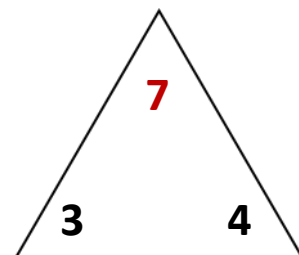
$$\boxed{} - \boxed{} = \boxed{}$$



$$\boxed{} + \boxed{} = \boxed{}$$

$$\boxed{} - \boxed{} = \boxed{}$$

$$\boxed{} - \boxed{} = \boxed{}$$



$$\boxed{} + \boxed{} = \boxed{}$$

$$\boxed{} - \boxed{} = \boxed{}$$

$$\boxed{} - \boxed{} = \boxed{}$$